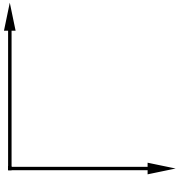


Name _____

Date _____

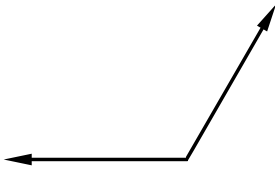
Angles

Right Angle



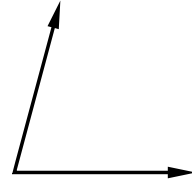
90°

Obtuse Angle



$>90^\circ$

Acute Angle



$<90^\circ$

Directions: Tell whether the angles below are acute, obtuse, or right angles.

