



Arrays

Directions: Tell the multiplication fact that represents each array.


Examples:



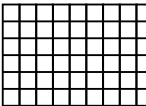
$6 \times 7 = 42$




$12 \times 5 = 60$


1. 


2. 


3. 


4. 


5. 

6. 

7. 

8. 

9. 

10. 

11. 

12. 