






Name _____

Decimals: Tenths Hundredths

Date _____

Teacher _____


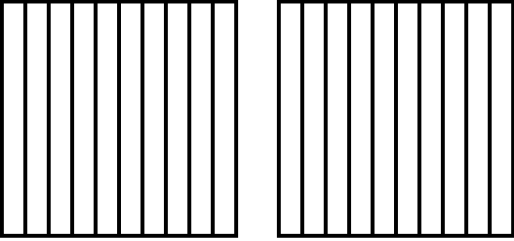



Model	Fraction or Mixed Number	Decimal	Word Form
	<p>_____</p>	<p>_____</p>	<p>_____</p>
	<p>_____</p>	<p>1.46</p>	<p>_____</p>
	<p>_____</p>	<p>_____</p>	<p>one and seven tenths</p>
	<p>_____</p>	<p>_____</p>	<p>one and sixty-five hundredths</p>
	<p>$\frac{9}{10}$</p>	<p>_____</p>	<p>_____</p>

Name _____

Decimals: Tenths Hundredths

Date _____

Teacher _____

Model	Fraction or Mixed Number	Decimal	Word Form
	<p>_____</p>	<p>_____</p>	<p>thirty-eight hundredths</p>
	<p>_____</p>	<p>1.3</p>	<p>_____</p>
	<p>_____</p>	<p>_____</p>	<p>_____</p>
	<p>_____</p>	<p>0.4</p>	<p>_____</p>
	<p>$\frac{172}{100}$</p>	<p>_____</p>	<p>_____</p>