

Name _____


Homework Week 12 Tuesday

1) Solve. Show your work.

$$4 \overline{)97}$$

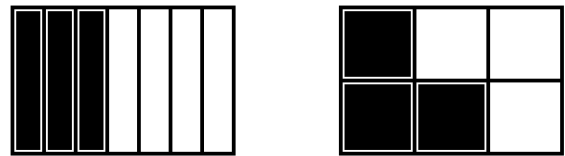
2) Farmer Brown picked 72 bushels of apples. Each bushel held 58 apples. How many apples did Farmer Brown pick?

3) Label the Mixed Number AND Improper Fraction.



Mixed #: _____ Improper Fraction _____

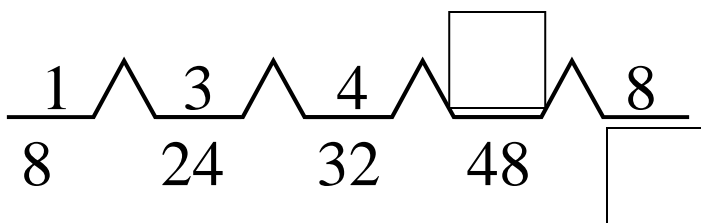
4) Compare using $<$, $>$, or $=$. Prove



5) Marina planted rosebushes in her garden. She planted 8 rows of rosebushes, and put 6 rosebushes in each row. Draw an array to show Marina's garden.

6) Write a complete fact family for problem #5.

7) Complete the bridge map.



rf: _____

8) Complete the table.

packages	4	9	40	98
straws	400	900		