




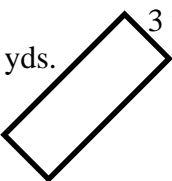
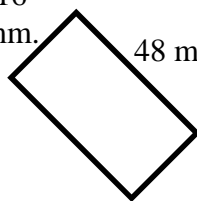
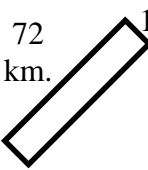


Name \_\_\_\_\_ Date \_\_\_\_\_

## Perimeter & Area

Find the perimeter and area of each object. Use the dimensions that are given, and be sure to show your work.

 <p>10 cm.</p> <p>6 cm.</p> <p>Perimeter: _____ Area: _____</p>	 <p>3 in.</p> <p>7 in.</p> <p>Perimeter: _____ Area: _____</p>
 <p>25 ft.</p> <p>5 ft.</p> <p>Perimeter: _____ Area: _____</p>	 <p>54 m.</p> <p>Perimeter: _____ Area: _____</p>
 <p>63 miles</p> <p>32 miles</p> <p>Perimeter: _____ Area: _____</p>	 <p>9 yds.</p> <p>3 yds.</p> <p>Perimeter: _____ Area: _____</p>
 <p>16 mm.</p> <p>48 mm.</p> <p>Perimeter: _____ Area: _____</p>	 <p>72 km.</p> <p>19 km.</p> <p>Perimeter: _____ Area: _____</p>