


Name _____ Date _____

Perimeter & Area


Use your Mathematics Chart to measure each side to the nearest centimeter. Find the perimeter and area of each shape. Be sure to show your work.

1)



Perimeter: _____ Area: _____

2)




Perimeter: _____ Area: _____

3)



Perimeter: _____ Area: _____

4)



Perimeter: _____ Area: _____