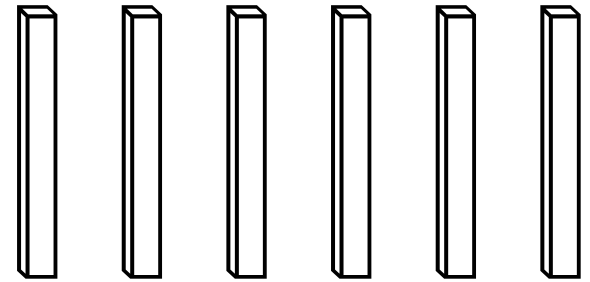




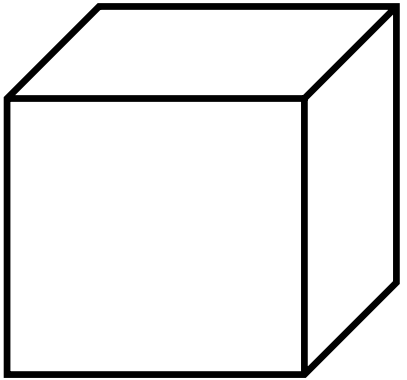
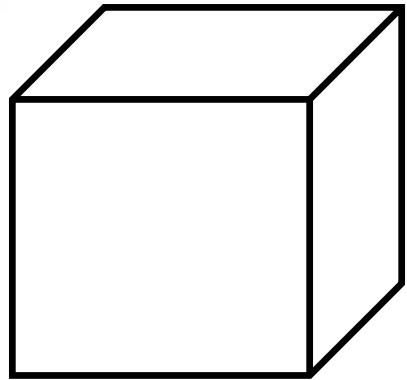




Place Value Review

What number is shown?



A. 261

C. 4,216

B. 461

D. 2,461

What number is shown?



$$700 + 50 + 9$$

A. 7,059

C. 759

B. 75

D. 795





What is the value of the 4?

6,417

A. 40

C. ten

B. hundred

D. 400

What goes in the box?



57 157

A. <

B. >

C. =

What form is shown?



$$700 + 50 + 9$$

- A. standard form
- B. expanded form
- C. base ten
- D. word form



What number is in the
thousands place?


6,417

A. 6

C. 1

B. 4

D. 7



What number is shown?



$$600 + 20 + 1$$

A. 612

C. 621

B. 261

D. 6,021



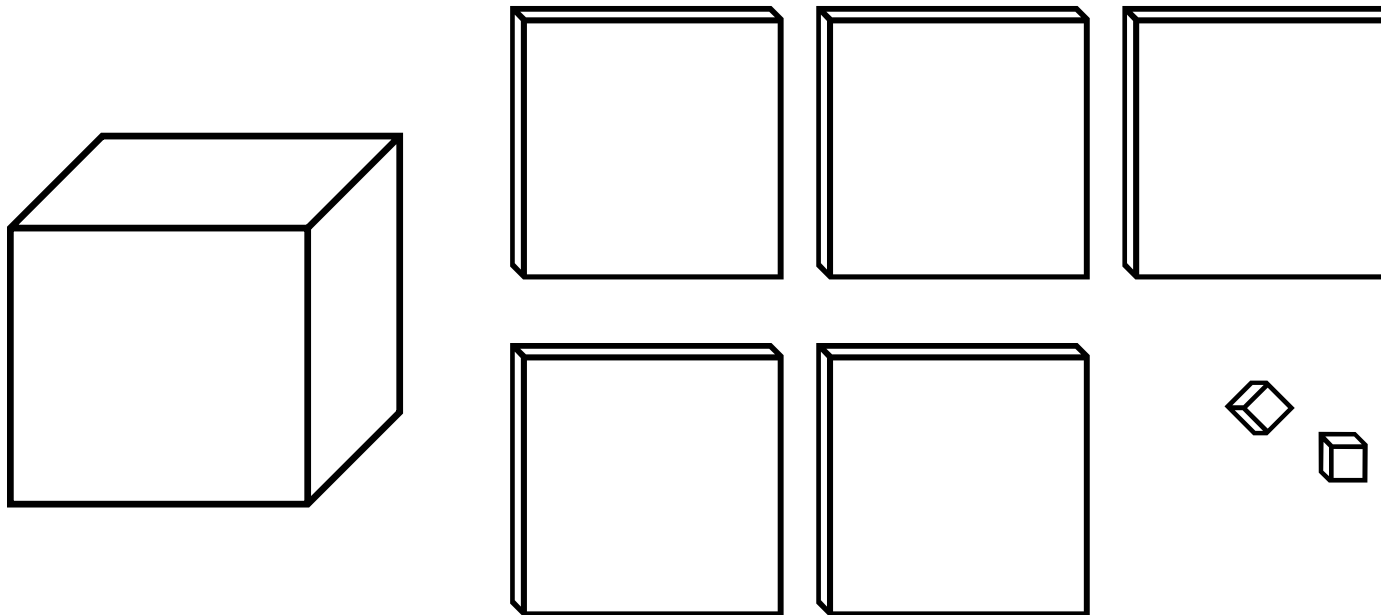
What form is shown?



seven hundred fifty-nine

- A. standard form
- B. expanded form
- C. base ten
- D. word form

What number is shown?



A. 1,502

C. 1,520

B. 152

D. 142

What number is shown?



$$900 + 30 + 6$$

A. 936

C. 396

B. 963

D. 9,036



What is the value of the 1?


82,109

A. 100

C. hundred

B. thousand

D. 10



What goes in the box?



25 sixteen

A. <

B. >

C. =



What number is in the
ones place?

82,109

A. 0

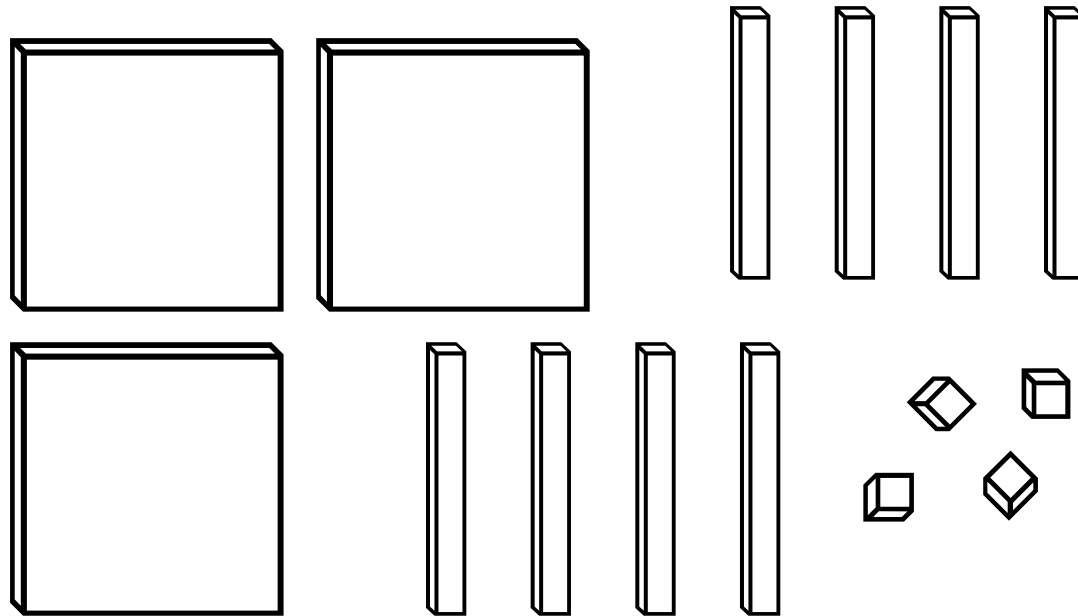
C. 8

B. 2

D. 9



What number is shown?



A. 344

C. 384

B. 184

D. 3,444

What number is shown?



$$1,000 + 500 + 2$$

A. 152

C. 1,502

B. 1,520

D. 10005002



What is the value of the 7?

7,325

A. 700

C. 7

B. 7,000

D. 70

What goes in the box?



343



243

A. <

B. >

C. =



What number is in the
hundreds place?


8,374

A. 8

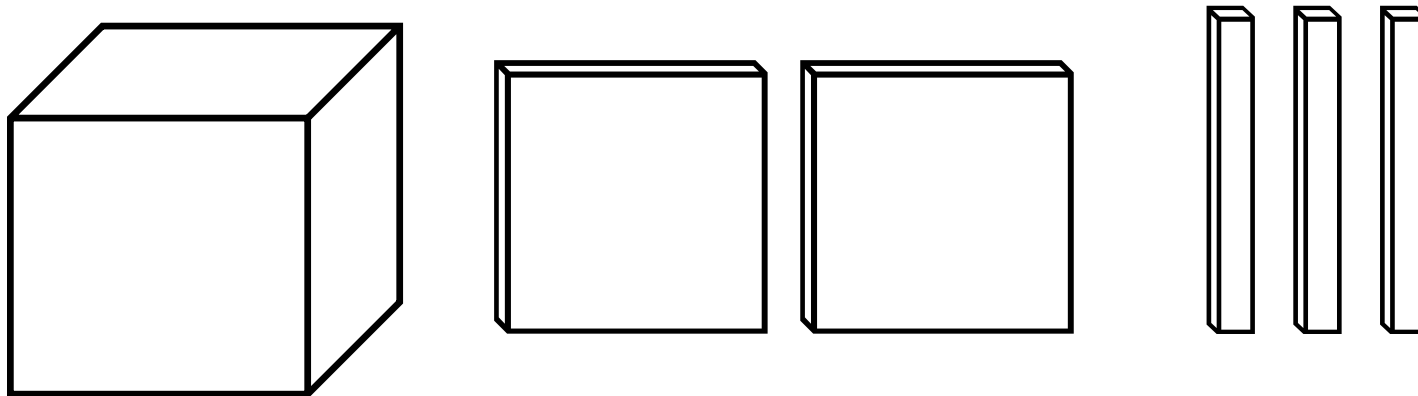
C. 7

B. 4

D. 3



What number is shown?



A. 1,230

C. 123

B. 1,203

D. 132

What number is shown?



$$800 + 70 + 9$$

A. 8,079

C. 789

B. 800709

D. 879

What form is shown?



746

- A. standard form
- B. expanded form
- C. base ten
- D. word form



What is the value of the 2?

6,025

A. 2,000

C. 2 tens

B. 2 ones

D. 200

What goes in the box?



thirty-eight



38

A. $<$

B. $>$

C. $=$



What number is in the
tens place?

29,438

A. 4

C. 8

B. 3

D. 9

