
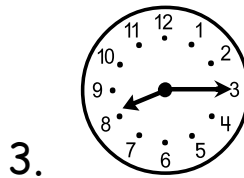
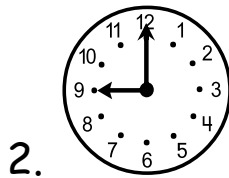
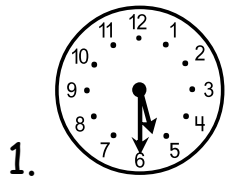


Name _____

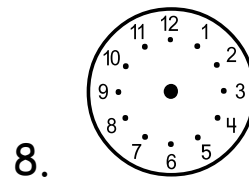
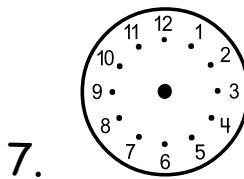
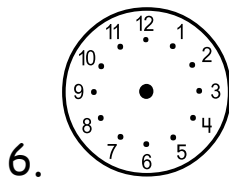
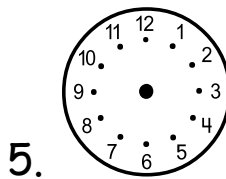
Date _____

Time

Part 1: Tell the time that is shown on each clock.



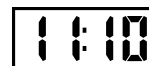
Part 2: Fill in the hour and minute hands to show the correct time.











Part 3: Tell the elapsed time.

